


Name: _____ Date: _____

How many socks?

Count sets of 2



You will need:

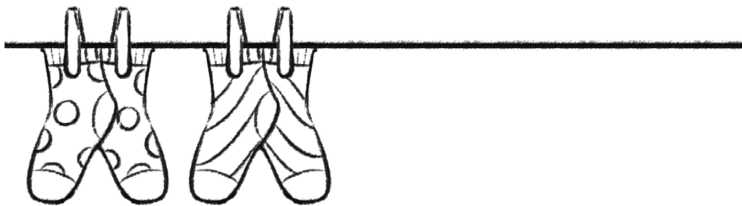
- coloured pencils



2	4	6	8	10
---	---	---	---	----

pair has

socks.



2	4	6	8	10
---	---	---	---	----

pairs have

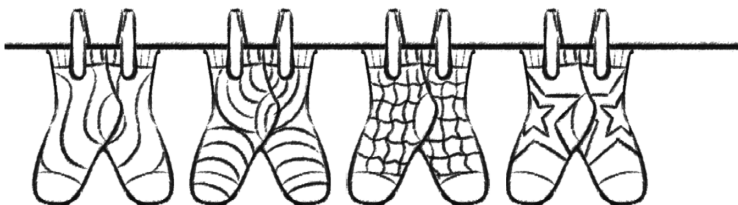
socks.



2	4		8	10
---	---	--	---	----

pairs have

socks.



2	4	6		10
---	---	---	--	----

pairs have

socks.



2	4	6	8	
---	---	---	---	--

pairs have

socks.

Teacher's notes

Children work out how many socks there are on each washing line. They colour the steps and complete each number track. They then complete each sentence with the correct numbers.