

# Emoji Coordinates

Draw the lines made by these coordinates. Use a different colour for each line.

(6,0) (8,1) (9,2) (10,4) (10,6) (9,8) (8,9) (6,10) (4,10)

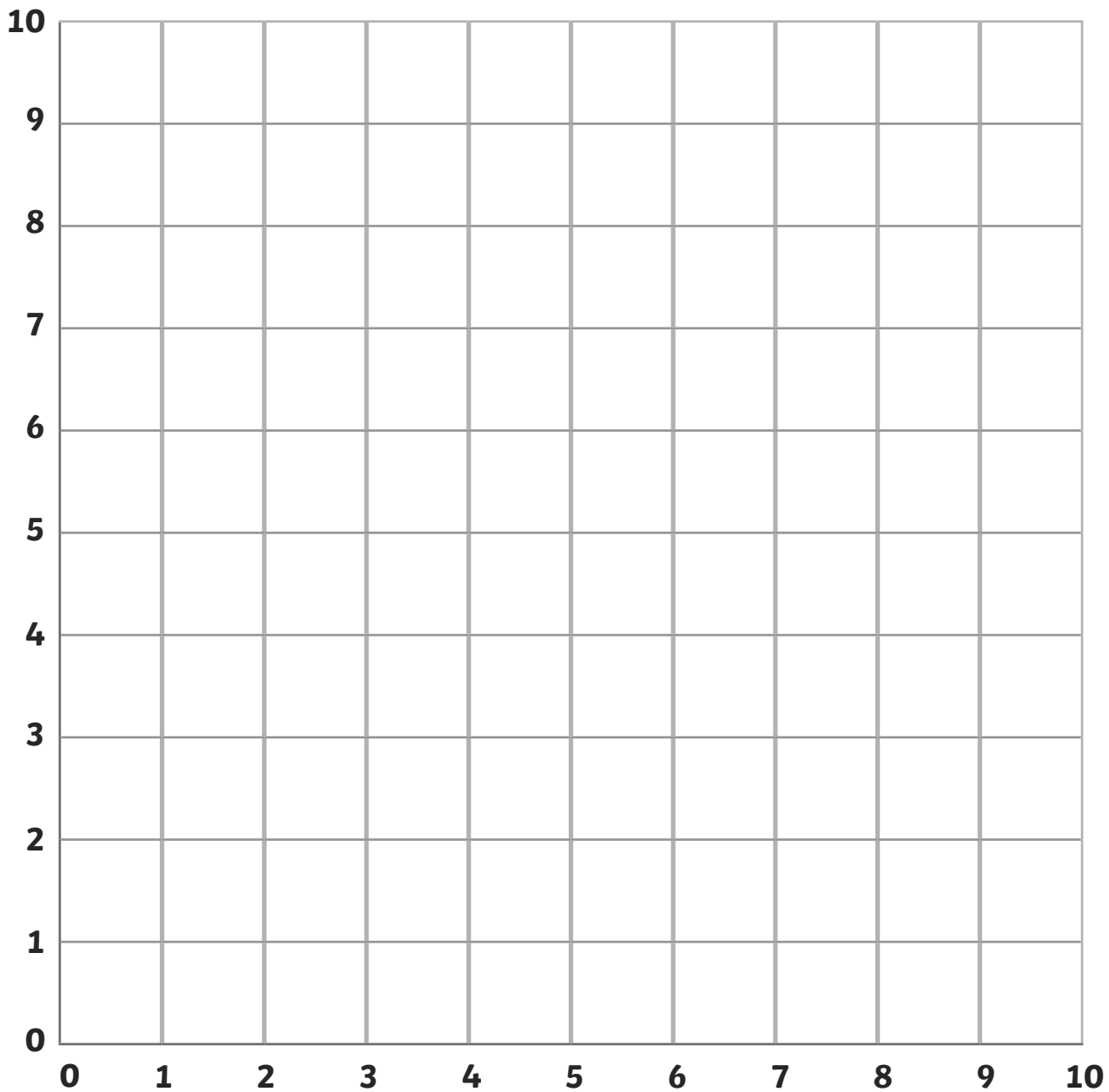
(6,0) (4,0) (2,1) (1,2) (0,4) (0,6) (1,8) (2,9) (4,10)

(3,5) (1,7) (2,8) (3,7) (4,8) (5,7) (3,5)

(7,5) (5,7) (6,8) (7,7) (8,8) (9,7) (7,5)

(3,4) (4,3) (6,3) (7,4) (6,2) (4,2) (3,4)

What shape do they make together?



# Emoji Coordinates Answers

Draw the lines made by these coordinates. Use a different colour for each line.

(6,0) (8,1) (9,2) (10,4) (10,6) (9,8) (8,9) (6,10) (4,10)

(6,0) (4,0) (2,1) (1,2) (0,4) (0,6) (1,8) (2,9) (4,10)

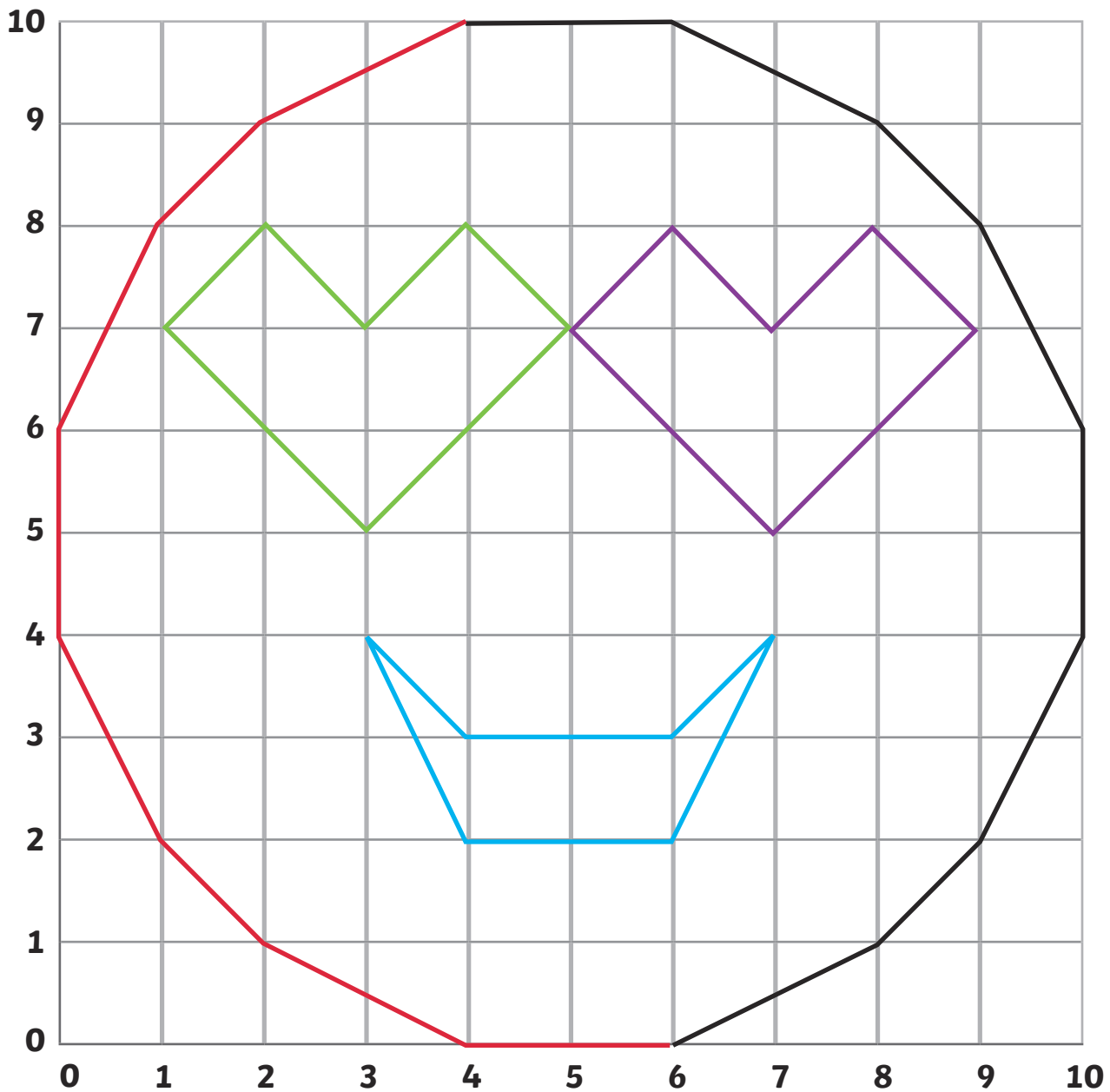
(3,5) (1,7) (2,8) (3,7) (4,8) (5,7) (3,5)

(7,5) (5,7) (6,8) (7,7) (8,8) (9,7) (7,5)

(3,4) (4,3) (6,3) (7,4) (6,2) (4,2) (3,4)

What shape do they make together?

**Hearts face emoji**



# Emoji Coordinates

Draw the lines made by these coordinates. Use a different colour for each line.

(6,0) (8,1) (9,2) (10,4) (10,6) (9,8) (8,9) (6,10) (4,10)

(6,0) (4,0) (2,1) (1,2) (0,4) (0,6) (1,8) (2,9) (4,10)

(3,6) (4,7) (3,8) (2,7) (3,6)

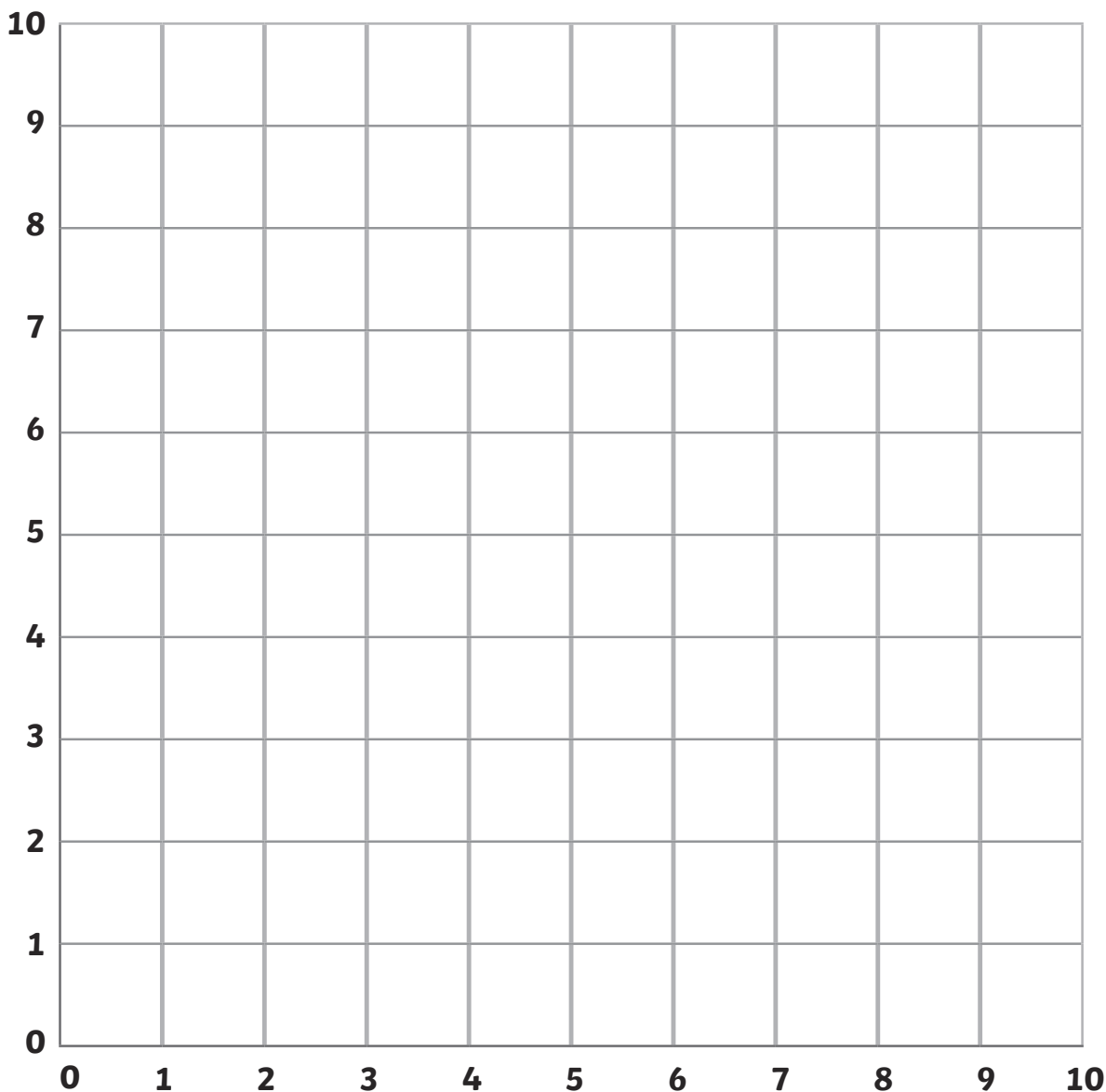
(1,7) (2,8) (4,9)

(6,9) (8,8) (9,7)

(6,7) (7,7) (8,6)

(3,4) (4,3) (6,3) (7,4) (6,2) (4,2) (3,4)

What shape do they make together?



# Emoji Coordinates Answers

Draw the lines made by these coordinates. Use a different colour for each line.

(6,0) (8,1) (9,2) (10,4) (10,6) (9,8) (8,9) (6,10) (4,10)

(6,0) (4,0) (2,1) (1,2) (0,4) (0,6) (1,8) (2,9) (4,10)

(3,6) (4,7) (3,8) (2,7) (3,6)

(1,7) (2,8) (4,9)

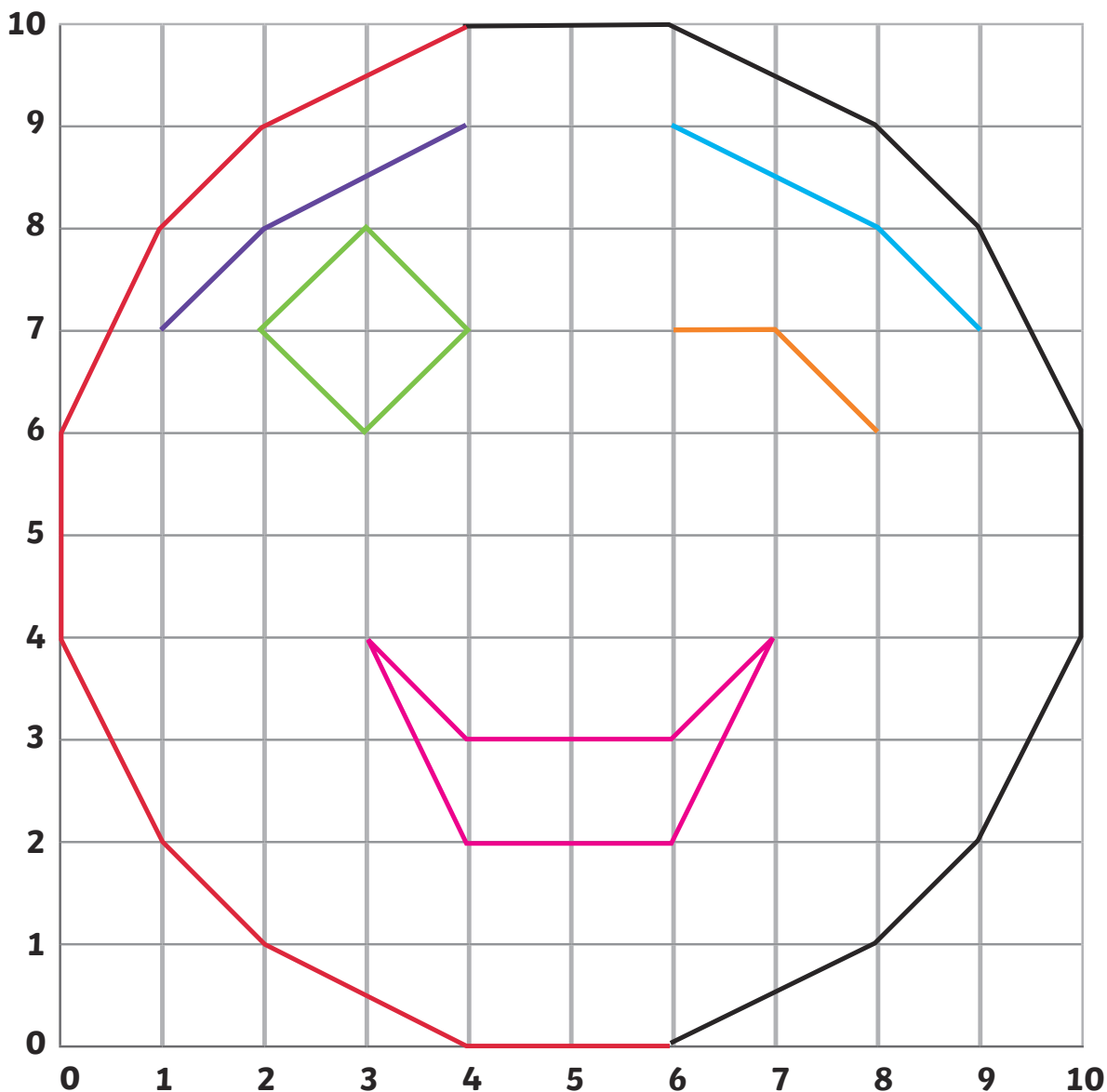
(6,9) (8,8) (9,7)

(6,7) (7,7) (8,6)

(3,4) (4,3) (6,3) (7,4) (6,2) (4,2) (3,4)

What shape do they make together?

**Winking face emoji**



# Emoji Coordinates

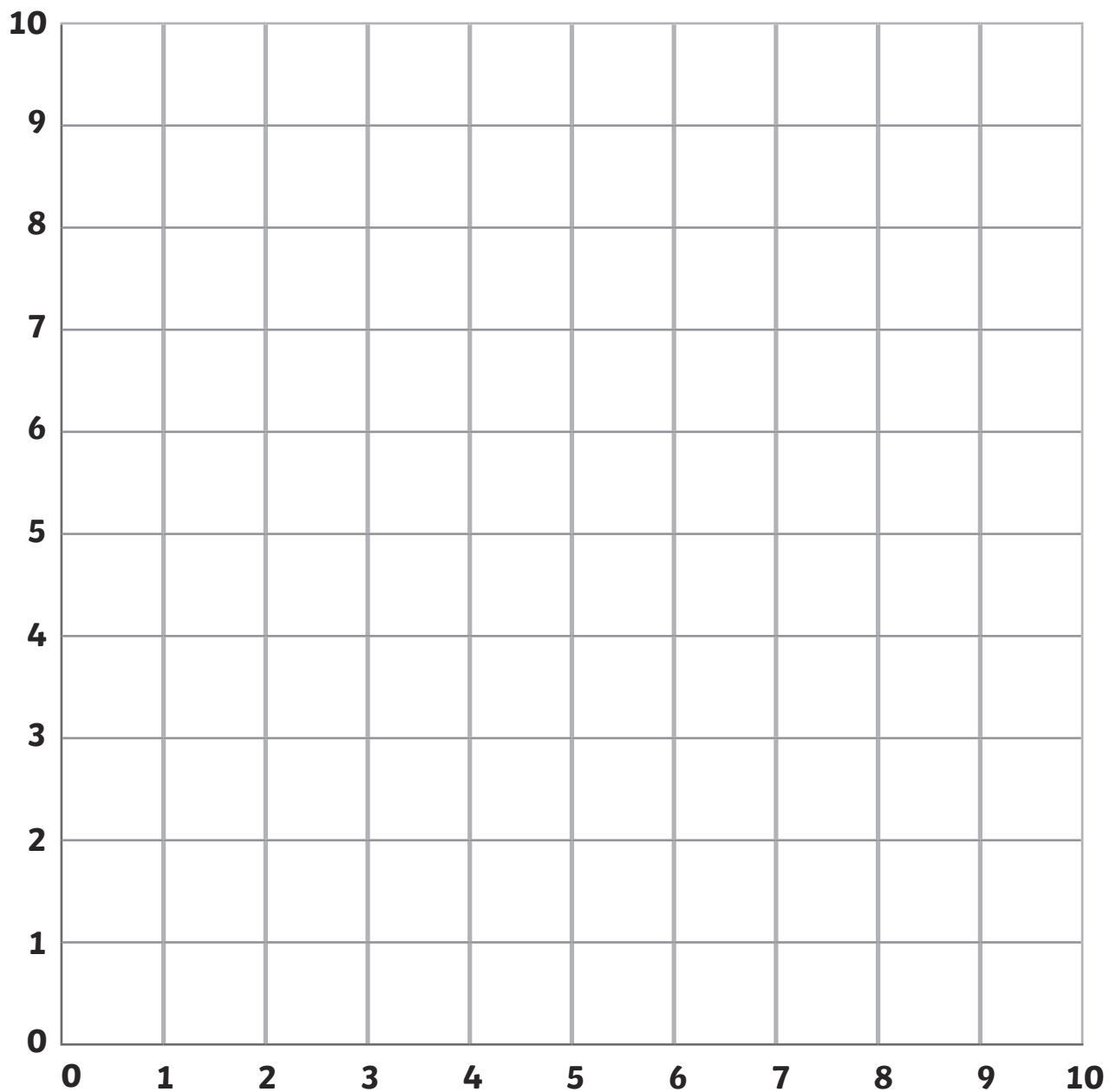
Draw the lines made by these coordinates. Use a different colour for each line.

(3,1) (0,4) (0,5) (1,6) (2,6) (3,5) (4,6) (5,6) (6,5) (6,4) (3,1)

(5,5) (2,8) (2,9) (3,10) (4,10) (5,9) (6,10) (7,10) (8,9) (8,8) (5,5)

What shape do they make together?

---



# Emoji Coordinates Answers

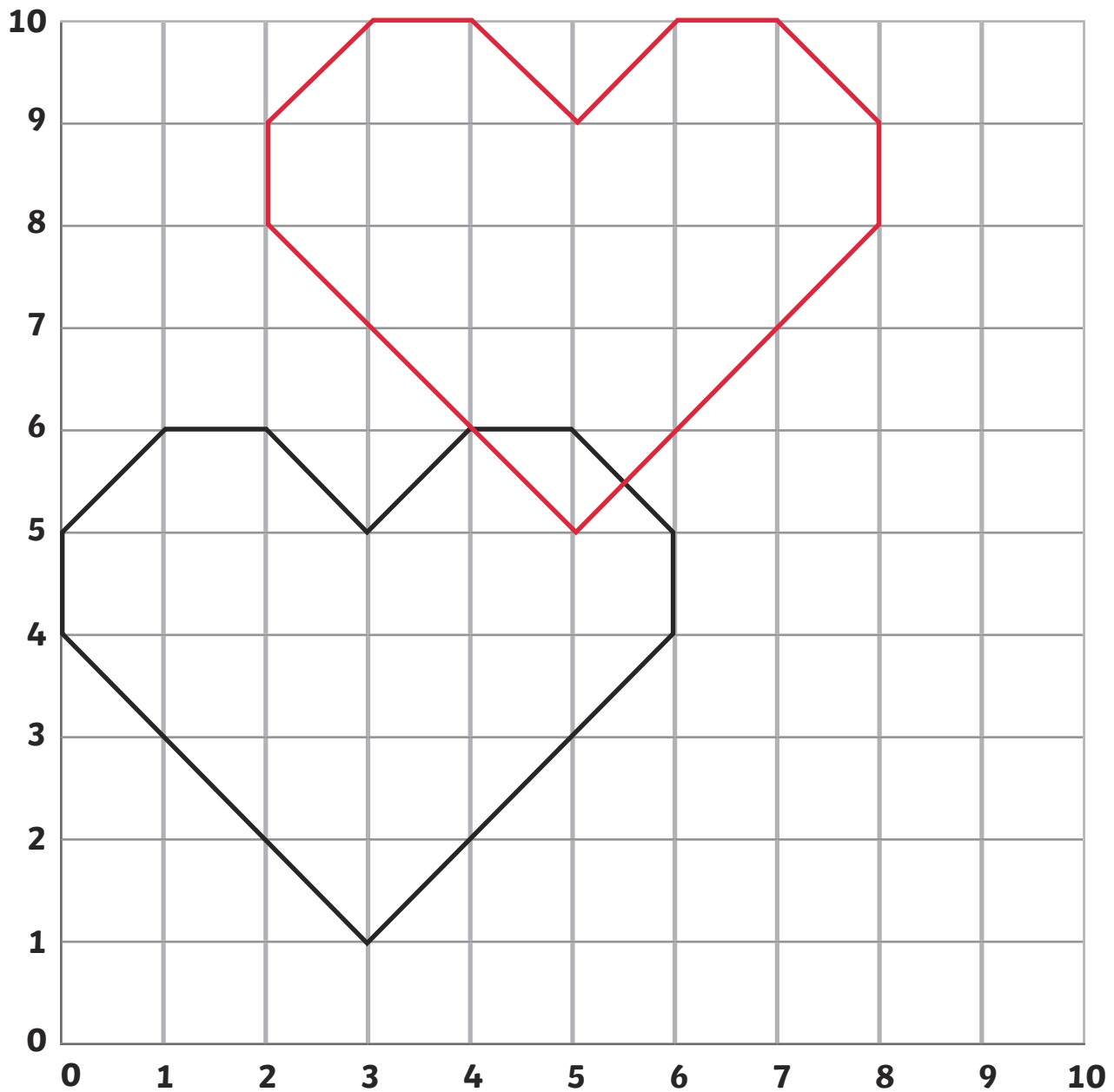
Draw the lines made by these coordinates. Use a different colour for each line.

(3,1) (0,4) (0,5) (1,6) (2,6) (3,5) (4,6) (5,6) (6,5) (6,4) (3,1)

(5,5) (2,8) (2,9) (3,10) (4,10) (5,9) (6,10) (7,10) (8,9) (8,8) (5,5)

What shape do they make together?

**Hearts emoji**



# Emoji Coordinates

Draw the lines made by these coordinates. Use a different colour for each line.

(8,1) (7,0) (5,0) (3,1) (4,4) (2,3) (0,4) (0,5) (1,6) (3,7)

(3,7) (2,9) (4,8)

(7,4) (6,3) (6,2) (7,1) (9,1) (10,2) (9,2) (10,4) (10,5) (9,6) (9,4) (8,3) (7,4)

(9,6) (10,6) (9,7) (8,7) (7,8) (6,8) (6,9) (5,8) (5,9) (4,8)

(5,8) (6,7) (7,7) (6,6) (6,4) (7,5) (7,6) (8,7)

(7,5) (8,5) (7,4)

(4,6)

What shape do they make together?

