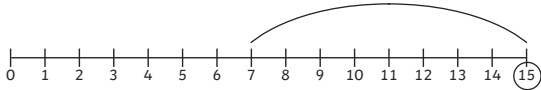
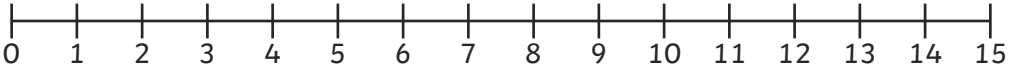
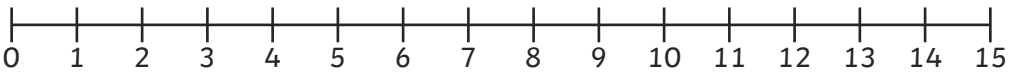
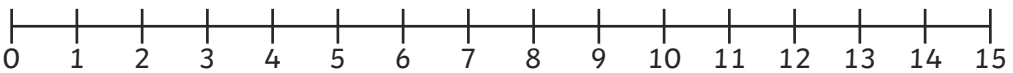
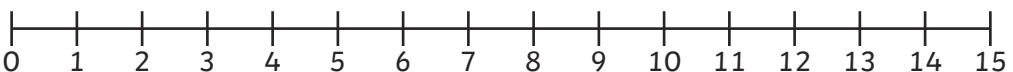
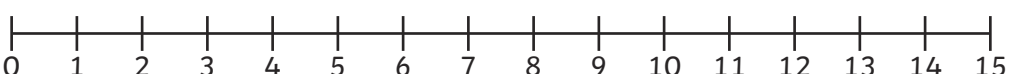
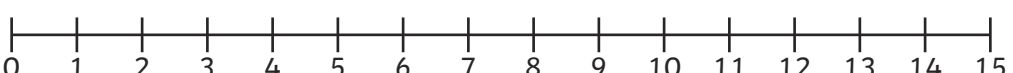
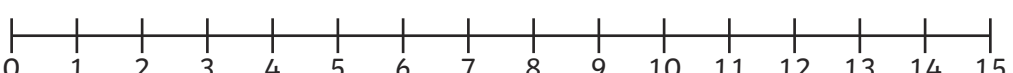
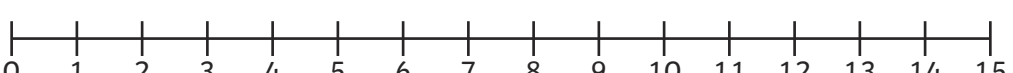
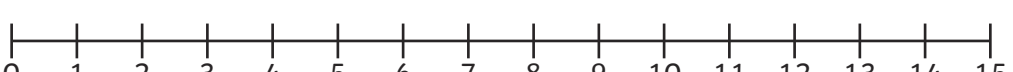
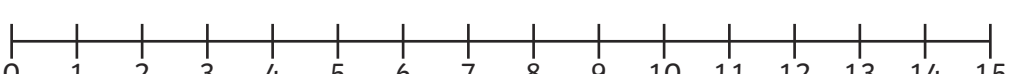


# Addition to 15 with a Number Line

Example	
$7 + 8 = 15$	 A number line from 0 to 15 with tick marks at every integer. A curved arrow starts at 7 and ends at 15, representing the addition of 8 to 7.

$4 + 11 =$ <input type="text"/>	 A number line from 0 to 15 with tick marks at every integer.
$9 + 2 =$ <input type="text"/>	 A number line from 0 to 15 with tick marks at every integer.
$4 + 9 =$ <input type="text"/>	 A number line from 0 to 15 with tick marks at every integer.
$1 + 10 =$ <input type="text"/>	 A number line from 0 to 15 with tick marks at every integer.
$3 + 7 =$ <input type="text"/>	 A number line from 0 to 15 with tick marks at every integer.
$9 + 6 =$ <input type="text"/>	 A number line from 0 to 15 with tick marks at every integer.
$3 + 5 =$ <input type="text"/>	 A number line from 0 to 15 with tick marks at every integer.
$12 + 2 =$ <input type="text"/>	 A number line from 0 to 15 with tick marks at every integer.
$13 + 1 =$ <input type="text"/>	 A number line from 0 to 15 with tick marks at every integer.
$1 + 14 =$ <input type="text"/>	 A number line from 0 to 15 with tick marks at every integer.