


Spring Test 7


Questions, Answers, Strand and Level Information



Read the following instructions or press 'play'  and listen to the instructions being read from the CD-ROM.

Listen carefully to the instructions I am going to give you. When I have finished reading them, I will answer any questions. However, you will not be able to ask any questions once the test has begun.

I am going to ask you 15 questions for the test. On your sheet there is an answer box for each question, where you should write the answer to the question and nothing else. You should work out the answer to each question in your head, but you may jot things down outside the answer box if this helps you. Do not try to write down your calculation because this will waste time and you may miss the next question. For some of the questions, important information is already written down for you on the sheet.

I will read out each question twice. Listen carefully both times. You will then have time to work out your answer. If you cannot work out an answer, put a cross in the answer box. If you make a mistake, cross out the wrong answer and write the correct one next to it. There are some easy and some harder questions, so do not be put off if you cannot answer a question.

Now pause, or press 'pause'  on your CD player or computer. Ask the children if they have any questions. Once you have answered all questions, read out the following instructions. Alternatively, play the audio recording from the CD-ROM.

	Answer	Strand	Level
 Now we are ready to start the test.			
For this group of questions you will have 5 seconds to work out each answer and write it down.			
1 What is one less than forty-three?	42	2	2
2 What is eight take away two?	6	3	2
3 Add nine to thirty-five.	44	4	2
4 Write in digits the number six thousand and eleven.	6011	2	3
5 What is the difference between twenty and fifty?	30	4	2
6 Look at your answer sheet. What is the digit three worth in the number?	300	2	3
7 Look at your answer sheet. Put a ring around the day that comes two days before Sunday.	Friday	6	2
8 Look at your answer sheet. Circle the shape with three sides.		5	2
9 Double sixteen.	32	3	2
10 Look at your answer sheet. Write the next number in the sequence.	51	2	2

For this group of questions you will have 10 seconds to work out each answer and write it down.

11 Write a multiple of five that is more than twenty and less than forty.	25, 30 or 35	3	3
12 Kris paid for a meal with a ten pound note and got three pounds change. How much did the meal cost?	£7	1/3	1
13 Look at your answer sheet. Write the time shown on the analogue clock as it would appear on a twelve-hour digital clock.	5:20	6	3
14 What is the total of two hundred and sixty and four hundred and fifty?	710	3	4
15 What do you multiply by ten to make five hundred and ten?	51	4	3

Now put down your pen or pencil. The test is finished.