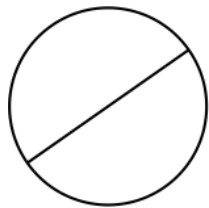


Circle Worksheet


1 a.



$$d = 3.6 \text{ mm}$$

Calculate the radius of the circle.


1 b.



$$r = 1.2 \text{ m}$$

Calculate the diameter of the circle.


2 a.



$$d = 5.3 \text{ yd}$$

Calculate the radius of the circle.

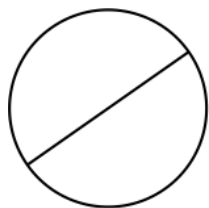
2 b.



$$r = 4.2 \text{ m}$$

Calculate the diameter of the circle.

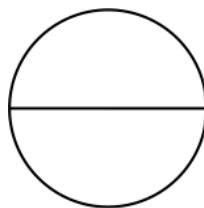
3 a.



$$d = 5.6 \text{ m}$$

Calculate the radius of the circle.

3 b.



$$d = 6.1 \text{ mm}$$

Calculate the radius of the circle.

Answer Key

Answers are rounded to 2 decimals.

1 a. 1.8 mm

1 b. 2.4 m

2 a. 2.65 yd

2 b. 8.4 m

3 a. 2.8 m

3 b. 3.05 mm

Copying permission: You are free to copy this worksheet to any number of students for their mathematics work. Do not distribute on websites, books, or any such material without permission. Copyright www.HomeschoolMath.net