

Spring Test 4

Name: _____

Class: _____

Date: _____




5-second questions

1		5 28
----------	--	------

2		
----------	--	--

3		180
----------	--	-----

4		43 48
----------	--	-------


5		
----------	--	------------------------------------------------------------------------------------

6		22
----------	--	----





7		
----------	--	--

8		678
----------	--	-----

9		37
----------	--	----

10	£					
-----------	---	--	-------------------------------------------------------------------------------------	-------------------------------------------------------------------------------------	-------------------------------------------------------------------------------------	-------------------------------------------------------------------------------------

10-second questions

11				
-----------	-------------------------------------------------------------------------------------	-------------------------------------------------------------------------------------	-------------------------------------------------------------------------------------	-------------------------------------------------------------------------------------

12	£		£18.50
			£20

13	10 a.m. 3 p.m. 3 a.m. 6 p.m.
-----------	------------------------------

14		6 5 7
-----------	--	-------

15		4 15
-----------	--	------

16	3512 5321 3215 3251
-----------	---------------------

17		millimetre
-----------	--	------------

18		25 6
-----------	--	------

19	$30 \div 2$	$30 - 15$
		double 15

20		40 3 5
-----------	--	--------

Total marks

/20

How well did you do?

Colour the numbers of the questions you got right. Some questions may appear more than once.

Use	12	15				
Count	3	8	16			
Facts	2	6	9	18	19	20
Calculate	1	4	10	12	14	15
Shape	7	11				
Measure	5	13	17			
Data						