



Name: _____ Date: _____






Money measures



Convert between kilometres and metres, centimetres and metres, and centimetres and millimetres



1 Measure the diameter of each coin to the nearest millimetre and complete the table.

Value of coin	<input type="text"/> mm	<input type="text"/> cm <input type="text"/> mm	<input type="text"/> . <input type="text"/> cm
1p 			
2p 			
5p 			
10p 			
£1 			

2 A sports club raises money by collecting 1p coins. The coins are placed edge to edge to form straight lines. How much money do they raise with:

a 1 m of 1p coins?

b 10 m of 1p coins?

c 100 m of 1p coins?

d 1 km of 1p coins?