

Name: \_\_\_\_\_ Date: \_\_\_\_\_


# Sticker solutions

Solve addition and subtraction problems

You will need:

- coloured pencils
- counting objects, such as buttons, beads, toy cars


Tom had 13 dinosaur stickers.



He gave 6 stickers to Asha.  
How many did he have left?

□ ○ □ ○ □

Lily had 8 flower stickers.



Meena gave her 3 more.  
How many did Lily have altogether?

□ ○ □ ○ □


Naomi had 15 car stickers.



She gave 6 stickers to Joe.  
How many did she have left?

□ ○ □ ○ □

Louis had 9 superhero stickers.



Sally gave him 5 more.  
How many did Louis have altogether?

□ ○ □ ○ □

## What to do

- Read each problem together. Using counting objects to help, if needed, work out whether it is an addition or a subtraction problem. Write the calculation and answer in the spaces provided.

For example,  $13 - 6 = 7$ .

13 - 6 = 7



On the back of this sheet, together write and draw one addition and one subtraction problem of your own.