


Name: _____ Date: _____

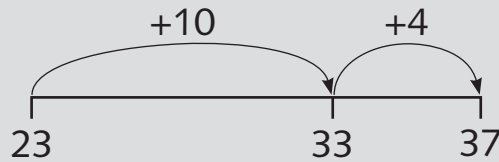
Adding on a number line



Add two 2-digit numbers mentally

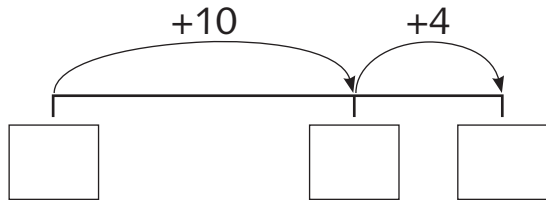
Example

$23 + 14 = 37$

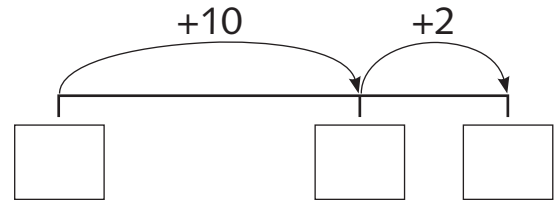


1 Complete these calculations.

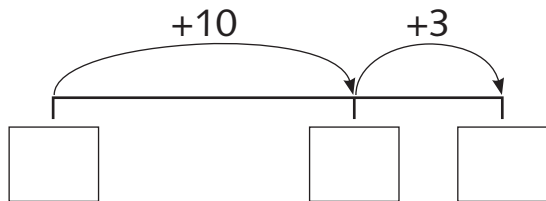
a $15 + 14 = \square$



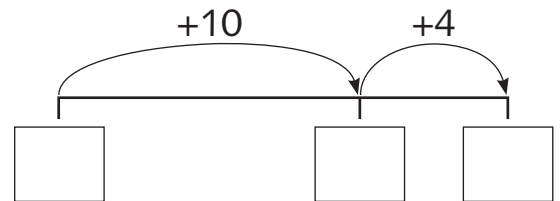
b $17 + 12 = \square$



c $24 + 13 = \square$

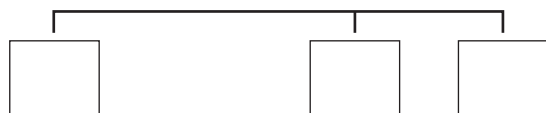


d $26 + 14 = \square$

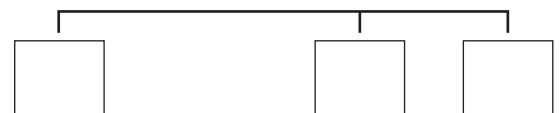


2 Now draw the jumps on the number lines yourself.

a $25 + 13 = \square$



b $22 + 16 = \square$



c $27 + 21 = \square$



d $26 + 22 = \square$

