

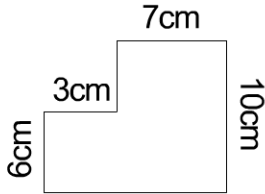


Measures

The shapes are not drawn to scale.

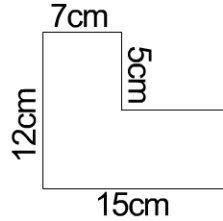
Calculate the areas of these compound shapes by first splitting them into rectangles.

Q1



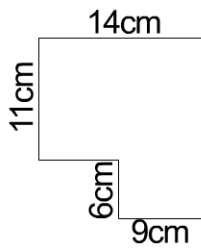
area = cm²

Q2



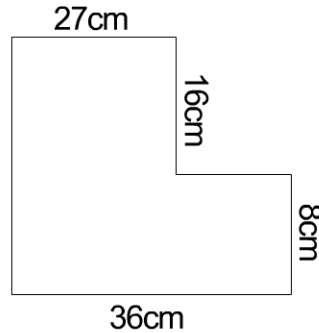
area = cm²

Q3



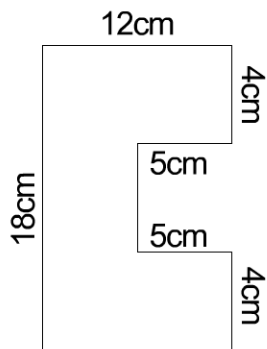
area = cm²

Q4



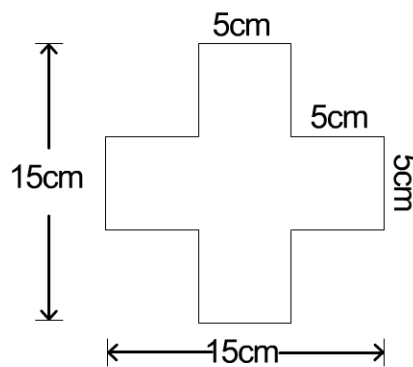
area = cm²

Q5



area = cm²

Q6



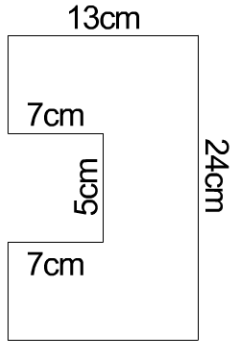
area = cm²



Measures

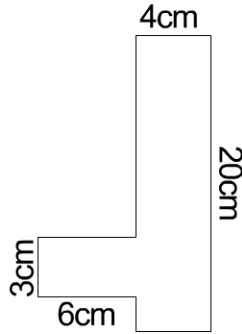
Calculate the areas of these compound shapes by first splitting them into rectangles.

Q7



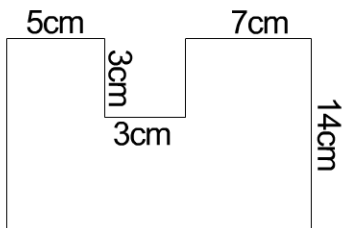
area = cm²

Q8



area = cm²

Q9



area = cm²