

1 How many muffins are there altogether?





There are  muffins on each tray.

There are  trays.

There are  muffins altogether.



2 How many apples are there altogether?

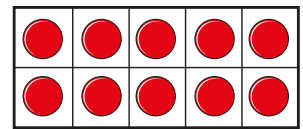
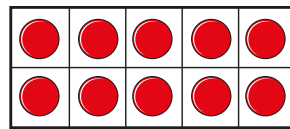
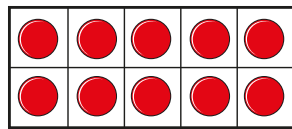
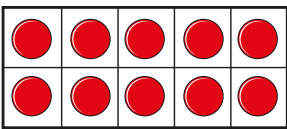


There are  apples on each ten frame.

There are  ten frames.

There are  apples altogether.

3 How many counters are there altogether?




There are  counters altogether.

4 Complete the number tracks.

10	20	30	40	50	60	70
----	----	----	----	----	----	----

70	60	50	40	30	20	10	0
----	----	----	----	----	----	----	---

5 Tom has these balloons.



He needs 60 balloons for a party.

Does Tom have enough balloons? Yes

How do you know?

