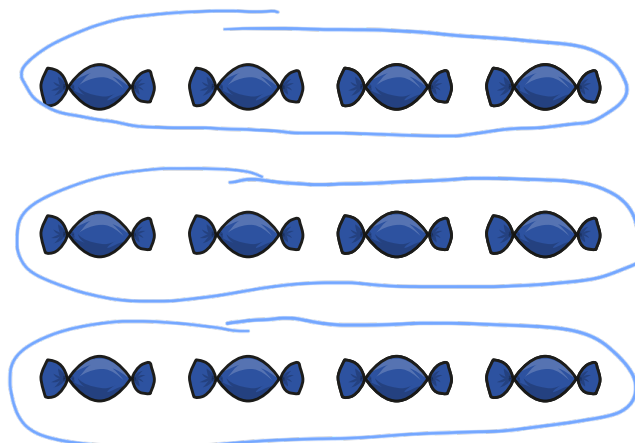


# Make arrays

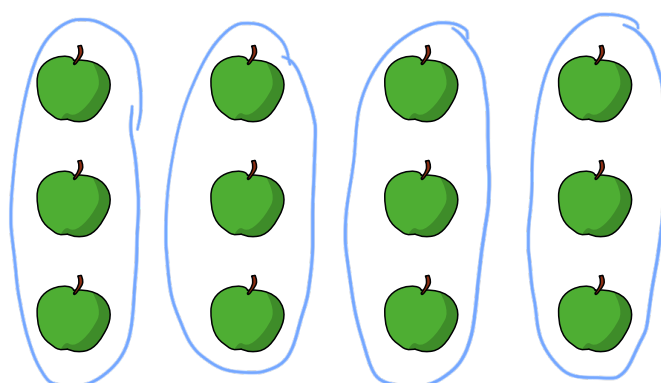
- 1 Circle each row of sweets.



How many rows are there?

There are  rows.

- 2 Circle each column of apples.




How many columns are there?

There are  columns.





**3** Make this array.



Complete the sentences.

a) There are  counters in each row.

There are  rows.

There are  counters altogether.

b) There are  counters in each column.

There are  columns.

There are  counters altogether.

Make your own array.

How many rows are there?

How many columns are there?