


Make equal groups – grouping

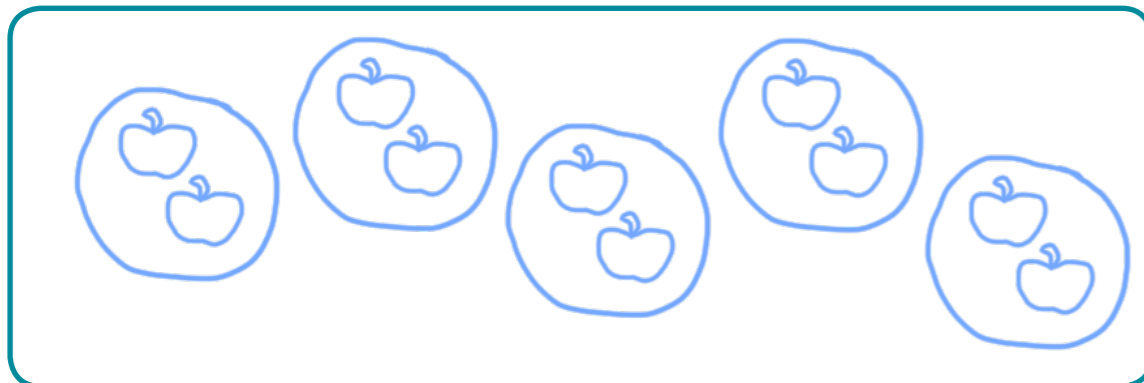
1 Annie has 10 apples.



Annie has some plates.

She wants to put 2 apples on each plate.

Show how Annie groups the apples.



Complete the sentences.

There are apples.

There are apples on each plate.

There are plates.



2 Take 15 counters.



Put the counters into groups of 3

Complete the sentences.


There are 15 counters.

The counters are in groups of

There are groups.

3 Mo has 20 chairs.

a) Circle groups of 5 chairs.



b) How many groups did you circle?

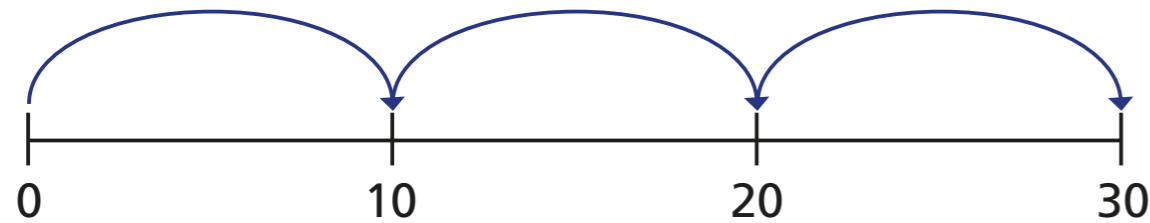
c) Complete the number sentence.

$$\boxed{20} \div \boxed{5} = \boxed{4}$$



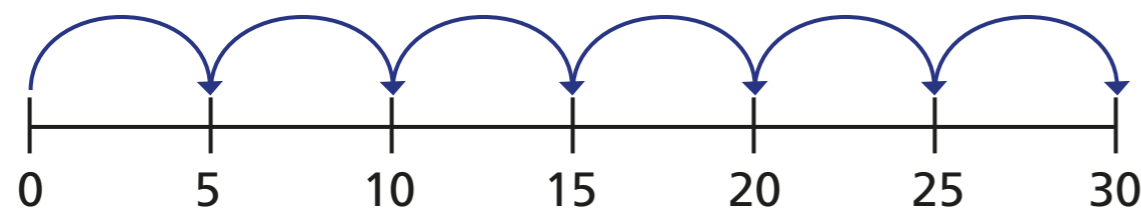
- 4 Complete the number sentences.
Use the number line to help you.

a) $30 \div 10 =$



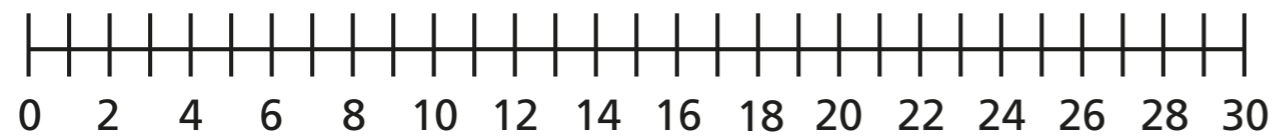
30 is made of equal groups of

b) $30 \div 5 =$




30 is made of equal groups of

- c) Investigate other equal groups you could make with 30.



Talk about it with a partner

- 5 Eva is putting 24 pencils into pots.



She puts 2 pencils into each pot.
How many pots does Eva need?

\div =

Eva needs pots.

- 6

With 40 counters you can only make equal groups of 4 and 10



Is Ron correct? NO

Use counters to show how you know.

