

Odd and even numbers

1 Eva uses counters to make the numbers from 1 to 10

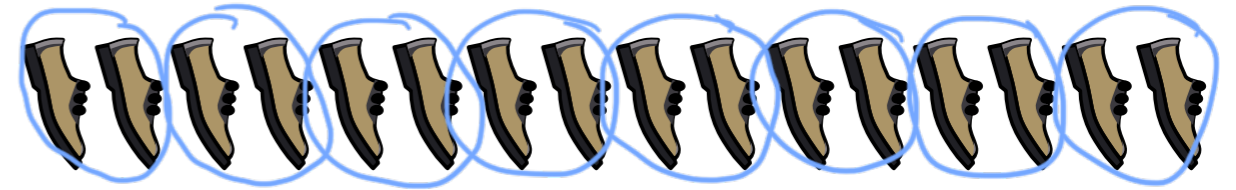
Diagram showing ten frames for numbers 1 to 10. Each frame is a 2x5 grid. Below each frame is a checkbox. Blue checkmarks are placed in the checkboxes for even numbers (2, 4, 6, 8, 10).

<input type="checkbox"/>	<input checked="" type="checkbox"/>	<input type="checkbox"/>	<input checked="" type="checkbox"/>	<input type="checkbox"/>
<input checked="" type="checkbox"/>	<input type="checkbox"/>	<input checked="" type="checkbox"/>	<input type="checkbox"/>	<input checked="" type="checkbox"/>

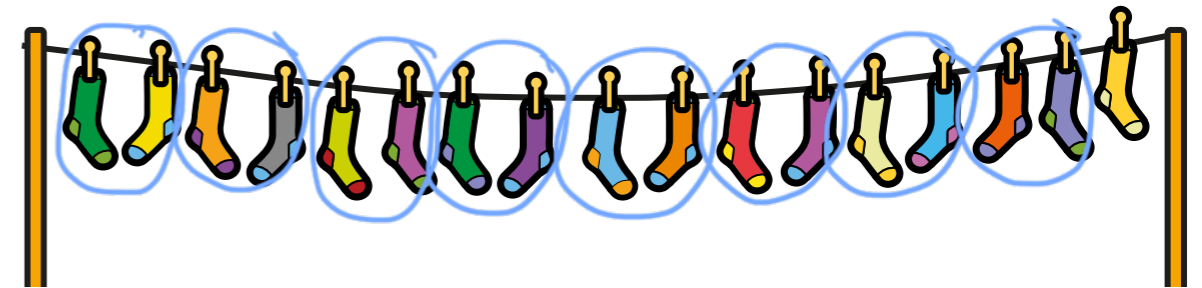
Tick all the numbers that are even.
What do you notice about all the even numbers?

2 Use counters and ten frames.
a) Show that 14 is an even number.
b) Show that 15 is an odd number.
c) Work out whether 18 is even or odd.
Compare answers with a partner.

3 Draw circles to show the groups.
a) Group the shoes in 2s to show that 16 is even.



b) Group the socks in 2s to show that 17 is odd.


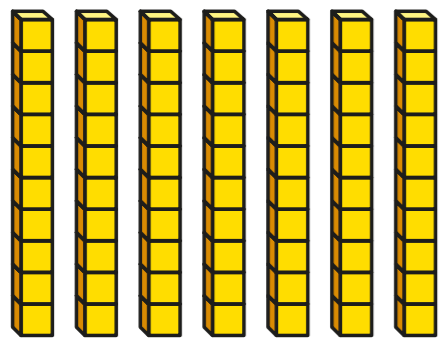


4 Colour all the even numbers.

1	2	3	4	5	6	7	8	9	10
11	12	13	14	15	16	17	18	19	20
21	22	23	24	25	26	27	28	29	30
31	32	33	34	35	36	37	38	39	40
41	42	43	44	45	46	47	48	49	50


What do you notice about the last digit of all the even numbers?

- 5 Dexter makes the number 70 from base 10



What mistake has Dexter made?

- 6 a) Teddy has a 2-digit number.
The 1st digit has been covered up.



Is Teddy's number odd or even?
Circle your answer.

odd even you cannot tell

How do you know?

- b) Dora has a 2-digit number
The 2nd digit has been covered up.



Is Dora's number odd or even?
Circle your answer.

odd even you cannot tell

- 7 Roll 2 dice and find the total.

Complete the table.

Dice 1	Dice 2	Total	Is the total odd or even?
3 (odd)	2 (even)	$3 + 2 = 5$	odd


What patterns can you spot?

- 8 Whitney is making a number pattern.



a) Write the missing numbers.

b) Write 2 numbers greater than 30 that could be in the pattern.



c) Write 2 numbers greater than 60 that could not be in the pattern.

